



Name: _____


Date: _____


Litres to Millilitres

Convert each container's capacity from litres to millilitres.

0.75L  _____ mL


1L  _____ mL


0.25L  _____ mL


2.250L  _____ mL

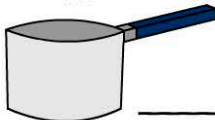
Millilitres to Litres

Convert each container's capacity from millilitres to litres.

725mL  _____ L


4500mL  _____ L


250mL  _____ L


5250mL  _____ L

Total Volume

Calculate the total volume these of containers.

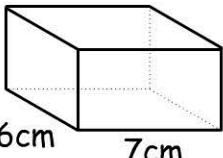
 25mL each

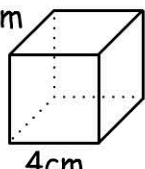
 5100mL

 8L

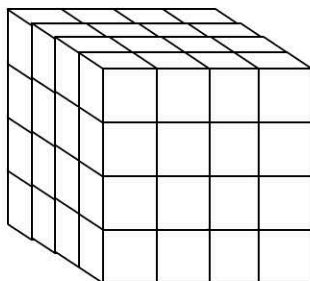
total volume = _____ mL

Calculating Volume

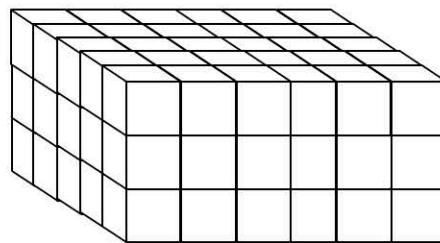
 volume = _____ cm³

 volume = _____ cm³

Volume of 3D Stacks



volume = _____ cm³



volume = _____ cm³