

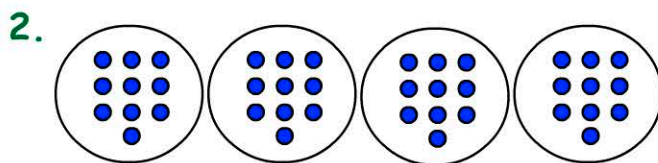
Four Operations, Money and Mass 2

Name:

Date:


1. $10 + 10 + 10 =$

- ☐ 10 ☐ 30
☐ 20 ☐ 40




4 groups of 10 =

3. Which is equal to 50c?



4. The fish is equal in weight to?




- ☐ 2 blocks
☐ 4 blocks
☐ 6 blocks
☐ 8 blocks

5. $7 + 3 + 9 =$

- 18 19 20 21
☐ ☐ ☐ ☐

6. $24 \div 3 =$



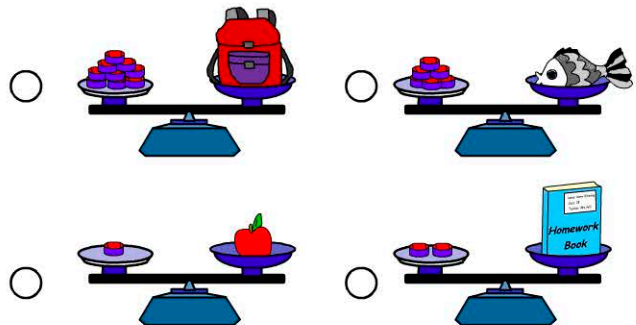
- ☐ 3 ☐ 8
☐ 6 ☐ 12

7. How much money does Jen have?



- ☐ 80 cents
☐ 70 cents
☐ 60 cents
☐ 50 cents

8. Which item is the lightest?



9. Which number comes next in the pattern?

25, 30, 35, 40,

10. $5 \times 10 =$