


Comparing Volume



adult guided activity

Find 3 large non-breakable containers. For example, a bucket, an ice cream container, a pot etc.

Find a small non-breakable container. For example, a plastic cup, a measuring cup etc.

Count the number of small containers that are needed to fill the large containers.

Record your measurements.

It took _____ to fill the _____.


It took _____ to fill the _____.

It took _____ to fill the _____.

Which container has the greatest capacity?

The _____ has the greatest capacity.

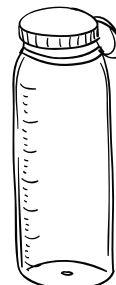
I measured how many cups it took to fill each container.



16 cups



3 cups



5 cups

Circle the container that has the smallest capacity.