

# Perimeter


Measure each side to the nearest cm.

Name: \_\_\_\_\_

Calculate the perimeter of these shapes.

Write your answers in cm then inches

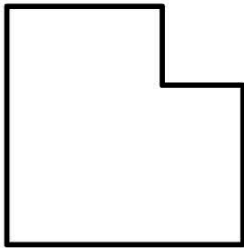
**2.5cm = 1 inch**



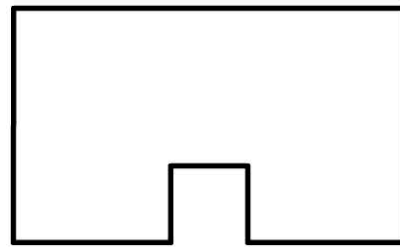
\_\_\_\_ cm  
\_\_\_\_ in



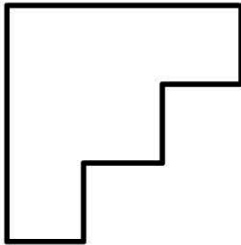
\_\_\_\_ cm  
\_\_\_\_ in



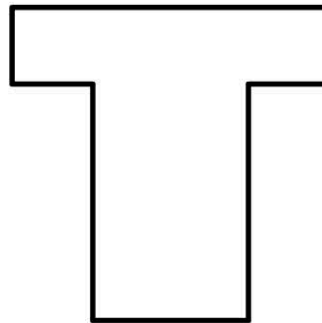
\_\_\_\_ cm  
\_\_\_\_ in



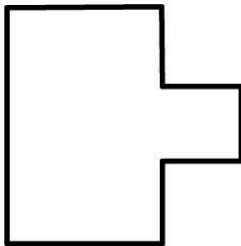
\_\_\_\_ cm  
\_\_\_\_ in



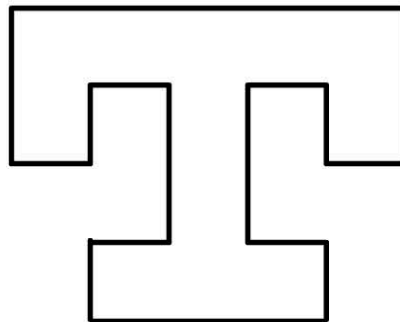
\_\_\_\_ cm  
\_\_\_\_ in



\_\_\_\_ cm  
\_\_\_\_ in



\_\_\_\_ cm  
\_\_\_\_ in



\_\_\_\_ cm  
\_\_\_\_ in