

# Volume

Name:

Date:

1. How much more is the can able to hold?

0.375L 250mL



- ☐ 0.1L      ☐ 0.115L  
☐ 105mL      ☐ 125mL

2. How many milliliters in 8.025 liters?

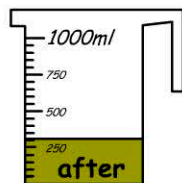
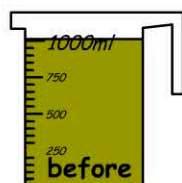
answer:  milliliters

3. Janie filled 3 buckets with water. How much water did she use?



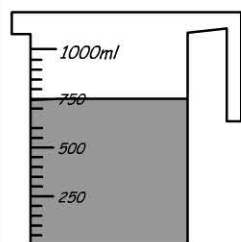
- ☐ 12500mL  
☐ 24000mL  
☐ 25500mL  
☐ 27500mL

4. How much gravy was used?

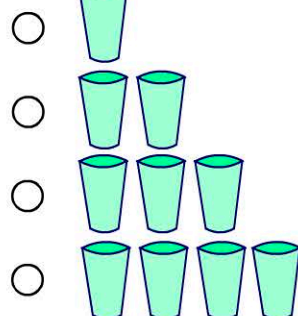


- ☐ 0.7L      ☐ 0.55L      ☐ 0.5L      ☐ 0.3L

5. How many glasses of water were used?



0.25L



6. How many cans of water are needed to fill the bucket?



0.375L

- ☐ 23      ☐ 18  
☐ 21      ☐ 16

7. Total

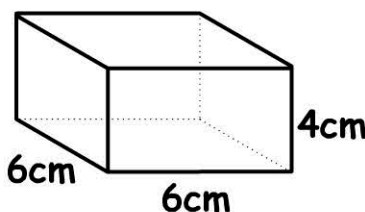
capacity =



375mL 250mL

- ☐ 4.325L      ☐ 4890mL  
☐ 4.625L      ☐ 4.25L

8. Volume =

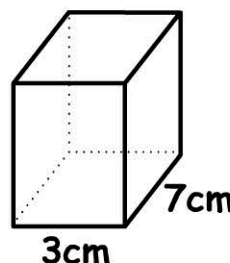


- ☐ 36 cm<sup>3</sup>  
☐ 96 cm<sup>3</sup>  
☐ 144 cm<sup>3</sup>  
☐ 176 cm<sup>3</sup>

9. Volume =



6cm



3cm

10.

$0.4L + 5L + 75mL =$   mL