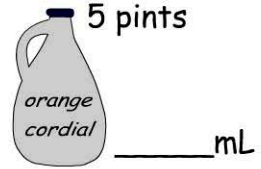
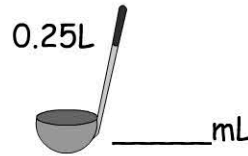
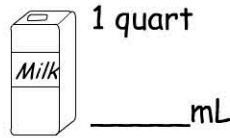
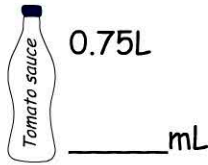


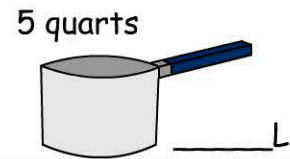
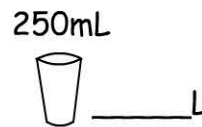
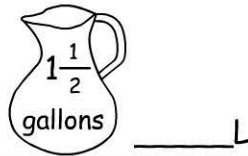

Name: _____

Date: _____

Convert each container's capacity milliliters.

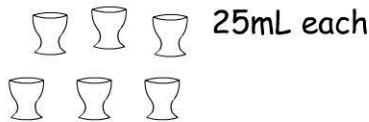


Convert each container's capacity to liters.



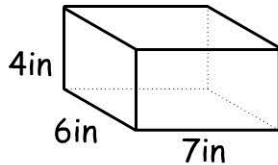
Total Volume

Calculate the total volume these of containers.

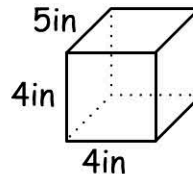


total volume =
_____ mL

Calculating Volume

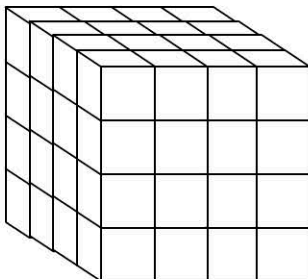
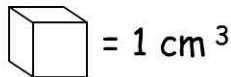


volume =
_____ in³

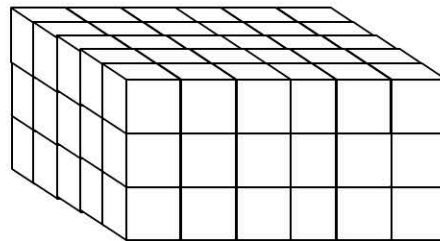


volume =
_____ in³

Volume of 3D Stacks



volume =
_____ cm³



volume =
_____ cm³