



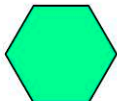

Name:

1. Which shape has three corners?

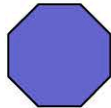
- ☐ triangle ☐ circle
☐ square ☐ pentagon
-

2. Squares, rectangles, trapezoids and parallelograms are quadrilaterals. How many sides do quadrilaterals have?

3. Which shape has 5 corners?





- ☐  ☐ 
☐  ☐ 
-

4. Name this shape.

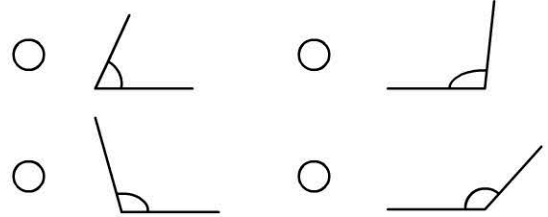


- ☐ octagon ☐ hexagon
☐ trapezoid ☐ triangle
-

5. Which is a parallelogram?

- ☐  ☐ 
☐  ☐ 

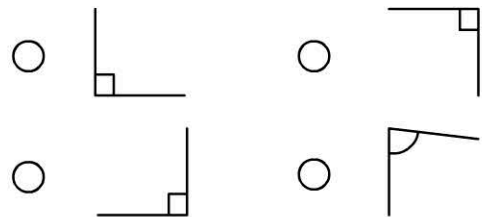
6. Which is the only angle less than a right angle?



7. Which of these shapes has four corners?

- ☐ triangle ☐ pentagon
☐ trapezoid ☐ hexagon
-

8. Which angle 'is not' a right angle?



9. How many right angles in a rectangle?



10. How many right angles in this triangle?

