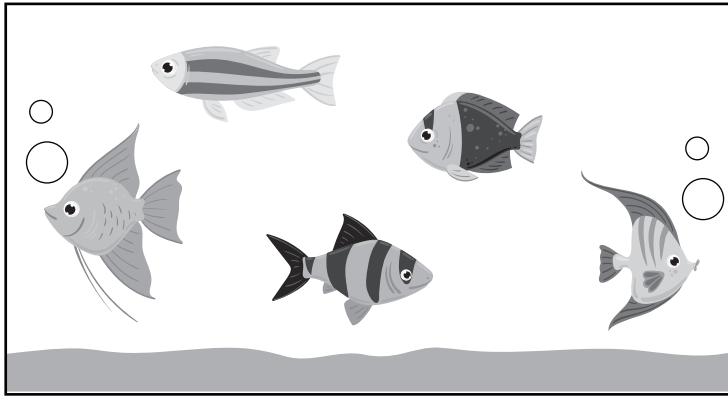


Name: \_\_\_\_\_

1) Which fish is second from the top of this tank?



2) Sam placed some jars and bottles on a shelf.



a) Which jar of these jars is on the middle shelf?




b) Which jar is on the far right of the bottom shelf?



Name: \_\_\_\_\_

3) Shown is how students are seated in a classroom.

FRONT OF CLASSROOM



a) Which of these students is sitting in the front row?

- Pam
- Sal
- Sue
- Joe


b) Who is sitting in the middle of the back row?

- Pam
- Sal
- Sue
- Joe

c) Who is sitting to the right of Jen?

- Tom
- Sal
- Sue
- Peg

4) Five people are in a line.



a) Who is second from the front?

- Leo
- Ali
- Paul
- Penny

b) After Leo leaves the line, what will Penny's position be?

- first
- second
- third
- fourth

Name: \_\_\_\_\_

5) Five children are holding hands.



Emma

Liam

Mia

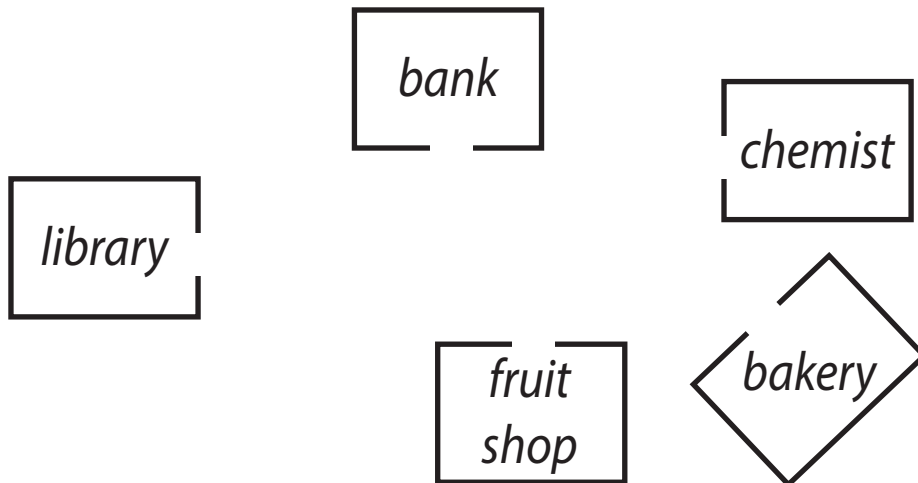
Henry

Ava

a) Who is the furthest from Ava? \_\_\_\_\_

b) Who is holding Mia's left hand? \_\_\_\_\_

6) The map shows the position of some buildings in a town.



a) Which building is closest to the chemist?

- library       fruit shop       bank       bakery

b) Which building is opposite the fruit shop?

- library       chemist       bank       bakery

c) Emma walks out of the bank and turns right. Which building is Emma facing?

- library       fruit shop       chemist       bakery