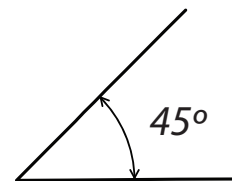
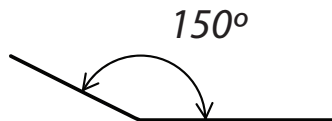
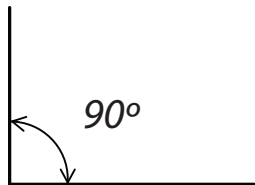
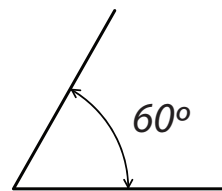
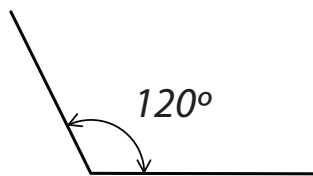
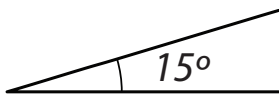


Name: _____

1) Name each type of angle.



2) Name each type of angle.

a) 75° angle: _____

b) 105° angle: _____


c) 90° angle: _____

d) 17° angle: _____

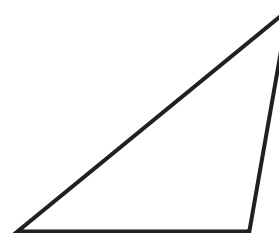
3) How many acute angles does this shape have? _____



4) How many obtuse angles does this shape have? _____



5) On this shape, mark each acute angle with an 'a' and each obtuse angle with an 'o'.



6) Draw a shape with two acute angles and two obtuse angles.

7) Draw a triangle with one right angle.