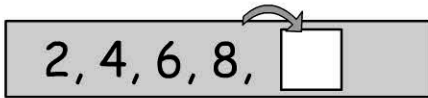



Name:

1. The next number in the pattern.

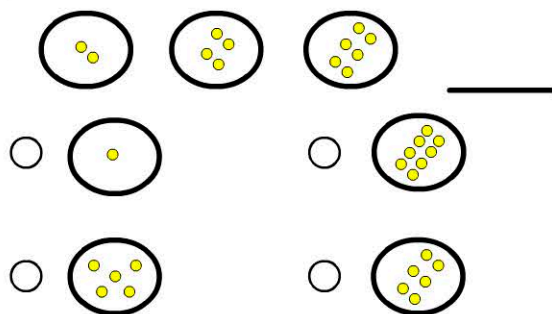


- 8
- 9
- 10
- 11

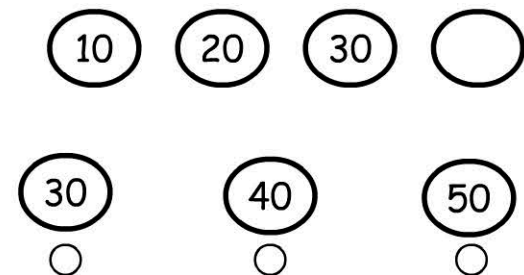
2. Which number is missing from the pattern?




3. What's the next part of the pattern?



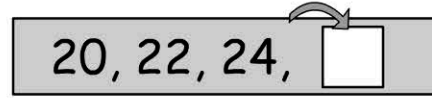
4. The next number in the pattern?



5. 

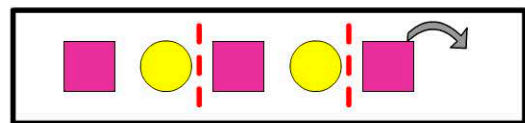
- 11
- 6
- 4
- 0





6. The next number in the pattern.



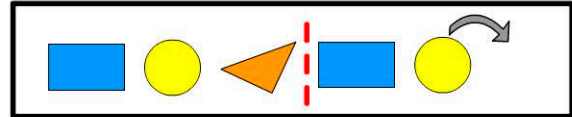
- 25
- 26
- 27
- 28





7. The next shape in the pattern.



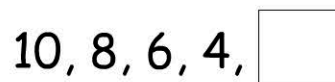
- 
- 
- 
- 

8. The next shape in the pattern.



- 
- 
- 
- 

9. The next number is:



10. The next number is:

