


- 1 Share two dozen chocolate eggs shown between 6 people. How many chocolate eggs each?




A:

- 3 A florist wants to make 6 bouquets (each with the same number of flowers) from 54 flowers. How many flowers in each bouquet?



A:

- 5 Insects have 6 legs. Tom counted the total number of legs of all insects standing on his bag. He counted 48 legs. How many insects on his bag?




A:

- 7 Jake delivered 66 parcels taking 6 trips. On each of the 6 trips he delivered the same number of parcels. How many parcels did he deliver on each trip?



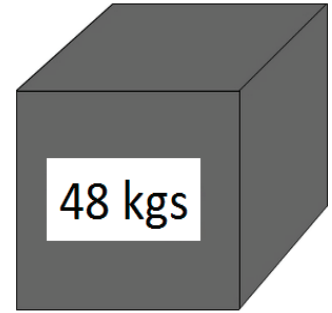
A:

- 9 Divide 36 tomatoes into boxes of 6 tomatoes each. How many boxes are needed?




A:

- 2 A 48 kg block of iron is cut into 6 identical pieces. What is the weight of each piece?



A:

- 4 A 36 m long string is cut into 6 equal pieces. How long is each piece?




A:

- 6 Share 54 coins equally between 6 people. How many coins each?




A:

- 8 36 oranges were divided equally into 6 boxes. How many oranges in each box?



A:

- 10 There are 24 students on camp. Each of the 6 cabins must sleep the same number of students. How many students in each cabin?



A: