


Name: _____

Sales - Discounts

The regular price for each item is shown.

boxing gloves



£40

bicycle




£120

soccer ball



£18

table tennis bats



£24

skates



£60

dumbbell



£36

1) Calculate the sale price for each item.

a) boxing gloves, half price:

b) bicycles, £30 off:

c) soccer balls, 50% off:

d) table tennis bats, 25% off:

e) skates, £15 off:

e) dumbbells, a third of the regular price:

2) During a sale, how much is saved when purchasing table tennis bats?

3) During a sale, Connie spent £54 on two items. What did Connie buy? _____

4) During a sale, Chilton spent £360 buying soccer balls for his club. How many soccer balls did he buy?

5) During a sale, Kim received £5 change from £50 for buying an item. Which item did Kim buy? _____

6) Joey bought 6 dumbbells for the regular price. How much would Joey have saved if he had purchased the dumbbells during a sale?

7) Lottie has £47. How much more does she need to buy a bicycle at the regular price?

8) On one day each year boxing gloves are 75% off! On this day, how many boxing gloves can be purchased for £100?

9) What is the regular price for this volleyball?



regular price:

Sale price 50% off: £12

The regular price for each item is shown.

boxing gloves



£40

bicycle




£120

soccer ball



£18

table tennis bats



£24

skates



£60

dumbbell



£36

1) Calculate the sale price for each item.

a) boxing gloves, half price: **£20**

b) bicycles, £30 off: **£90**

c) soccer balls, 50% off: **£9**

d) table tennis bats, 25% off: **£18**

e) skates, £15 off: **£45**

e) dumbbells, a third of the regular price: **£12**

2) During a sale, how much is saved when purchasing table tennis bats? **£6**

3) During a sale, Connie spent £54 on two items. What did Connie buy? skates soccer ball

4) During a sale, Chilton spent £360 buying soccer balls for his club. How many soccer balls did he buy? **40**

5) During a sale, Kim received £5 change from £50 for buying an item. Which item did Kim buy? skates

6) Joey bought 6 dumbbells for the regular price. How much would Joey have saved if he had purchased the dumbbells during a sale?

7) Lottie has £47. How much more does she need to buy a bicycle at the regular price?

8) On one day each year boxing gloves are 75% off! On this day, how many boxing gloves can be purchased for £100? **10**
75% off = £10 each

9) What is the regular price for this volleyball?



regular price: **£24**

Sale price 50% off: £12