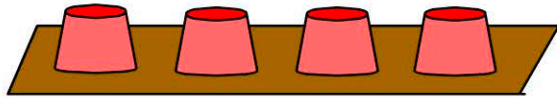
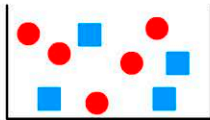


Name:



1. The chance of correctly picking the cup that's covering a ball?

- 25% 75%
- 50% 100%



2. There is a $\frac{4}{\square}$ chance of picking a square tile.

3. There are 200 tickets in a competition. If you have 12 tickets, what's the chance of you winning?

- 4% 8%
- 6% 12%


4. Rolling dice once, what is the chance of rolling an even number?



- 1.0 0.5
- 0.75 0.25

5. Hugo has a 0.4 chance of playing in the game. Which represents his chance of playing?

- 1 in 4 40%
- 0.25 $\frac{1}{2}$



There are 4 red and 4 green sticks.

6. What is the chance of choosing 5 red sticks?

- 7% 0.9%
- 4.5% 0%

7. I'm thinking of a number from 1-100. What's the chance of guessing the number within 10 attempts?

- 1% 30%
- 10% 100%

8. There are 1 million tickets in a raffle. I have 2. What are my chances of winning?

- $\frac{1}{200,000}$ $\frac{1}{10,000}$
- $\frac{1}{1000}$ $\frac{1}{500,000}$

There are 1000 marbles in the basket. Half are red. Half the red ones have a green stripe. The rest are blue.



9. What's the chance of picking a blue marble from the bag?

%

10. What's the chance of picking a red marble that has a green stripe?

%