

Name: _____

Addition

Add numbers up to 40 to numbers up to 100.

$43 + 34 = \underline{\quad}$

$0 + 31 = \underline{\quad}$

$29 + 35 = \underline{\quad}$

$12 + 33 = \underline{\quad}$

$31 + 31 = \underline{\quad}$

$48 + 37 = \underline{\quad}$

$6 + 30 = \underline{\quad}$

$35 + 38 = \underline{\quad}$

$20 + 33 = \underline{\quad}$

$19 + 32 = \underline{\quad}$

$15 + 37 = \underline{\quad}$


$50 + 35 = \underline{\quad}$

$37 + 32 = \underline{\quad}$

$25 + 40 = \underline{\quad}$

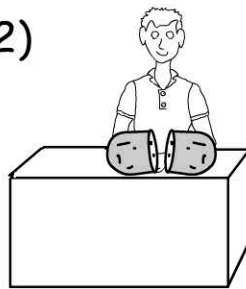
Working Mathematically

- 1) One of the year 3 classes has 37 fish in their tank. The other year 3 class has 32.



How many fish altogether? _____

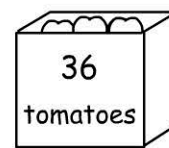
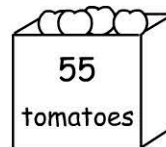
2)



Joe cut 38 full melons in half. How many half pieces of melon will he get? _____

3)

Tomato Delivery



How many tomatoes were delivered? _____

4)

January	February	March	April	May	June	July	August	September	October	November	December															
5	6	7	8	9	10	11	12	13	14	15	16	17	18	19	20	21	22	23	24	25	26	27	28	29	30	31

October: 31

November: 30

December: 31

Months and number of days

What's the total number of days in October, November and December? _____