

Mass

Name:

Date:

1. What's the total weight of the tower?



- 5 ounces 3 ounces
 4 ounces 2 ounces

2. What's the weight of the apple?



weight = ounces

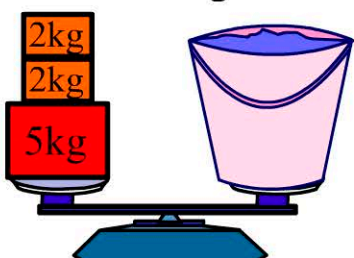
3. Which item weighs more than 2lb?

-

4. Greg is 8 years old. His weight is most likely:

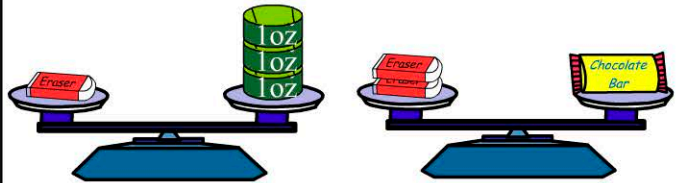
- 7lb 250lb
 41lb 1416lb

5. How much does the bucket of water weigh?



- 5kg
 7kg
 9kg
 11kg

= 1 ounce



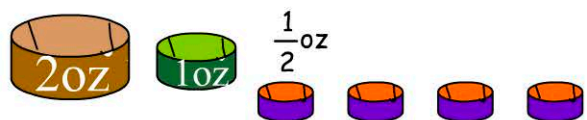
6. How much does the eraser weigh?

- 1oz 3oz
 2oz 4oz

7. What's the weight of the chocolate bar?

- 3oz 5oz
 4oz 6oz

8. What's the total weight?



- 6oz 10oz
 5oz 12oz

9. How many 1oz weights are needed to equal 1lb?

10. Three strawberries weigh 1oz. How much do 12 strawberries weigh? ounces

