

# Fractions, Length and Multiplication

Name:





Date:

1. 467 divided by 1000 =

- 4.67       46.7  
 0.467       0.0467

2.  $70\frac{1}{2}$  cm equals how many millimeters?  mm

3. Which shape's perimeter is not equal to 72?

-          
        

4. The fraction not equivalent to  $\frac{12}{20}$

- $\frac{6}{10}$         $\frac{24}{60}$   
  $\frac{24}{40}$         $\frac{36}{60}$

5. Which equation will produce the smallest answer? '/' is another form of the division symbol.

- $150 / 100$         $1428 / 100$   
  $320 / 1000$         $77 / 100$

6. An ant walked 31.5in to pick up a bread crumb then 42.5in back to its nest. How far did the ant walk?

- 75cm       220cm  
 185cm       208cm

7. The perimeter of a square is 320mm. What is its length?

- 8cm       6.5in  
 12in       16cm

8.  $11/121$  in its lowest form?

- $\frac{1}{11}$         $\frac{1}{12}$   
  $\frac{2}{22}$         $\frac{4}{44}$

9.  $(45 \times 10) + (3445 / 100) =$

'/' is another form of the division symbol.

10.

342 divided by  = 0.342