

Time

Name:

Date:

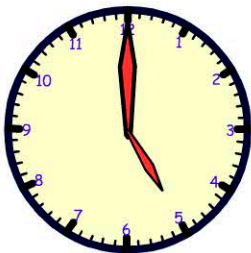
1. Which season occurs during December, January, February?.

- spring fall
 summer winter

2. How many minutes in one hour?

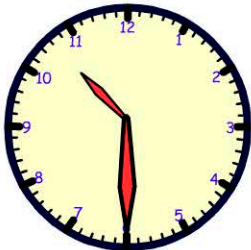
minutes in one hour

3. What time is shown on the clock?



- 5 o'clock 6 o'clock
 12 o'clock 1 o'clock

4. Which digital clock's time is the same as the analog clock?



-

5. How long till eleven o'clock? (from the time on the clock above).

- 10 min 30 min
 20 min 40 min

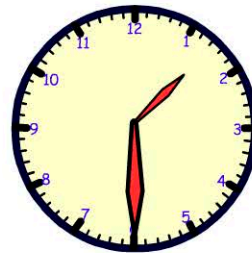
6. How many days in July?

- 30 28
 31 29

7. What is the date exactly 3 weeks after June 4?

- June 7 June 18
 June 11 June 25

8. Three and a half hours after the time on the analog clock.



- 2 o'clock 4 o'clock
 5 o'clock 6 o'clock

9. How many hours in one day?

hours

10. Jacelyn left home at 8:00. She arrived at school at 8:30. How long did it take her to walk to school?

min