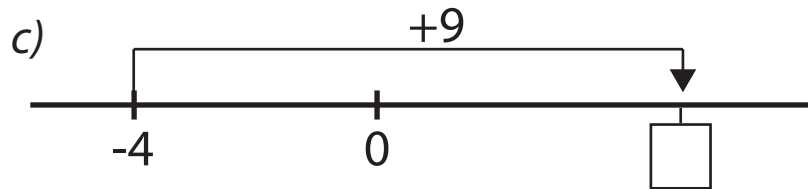
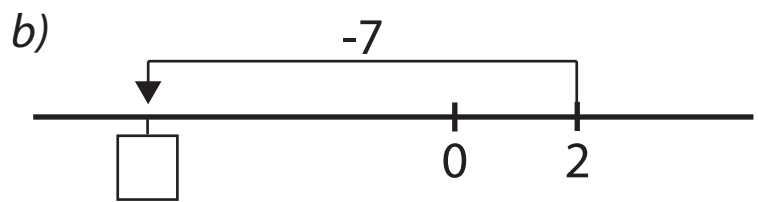
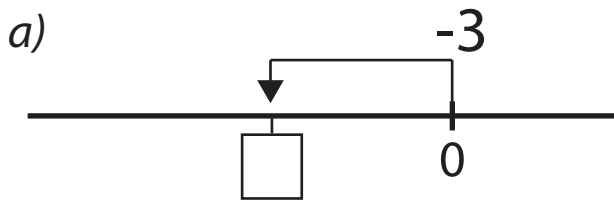
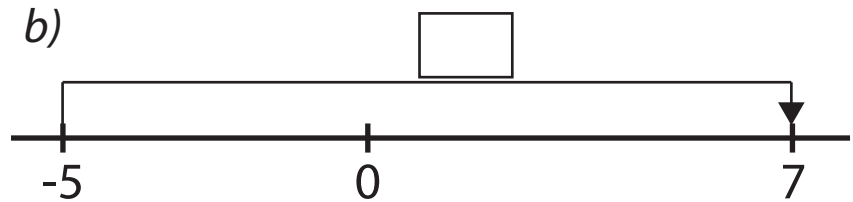
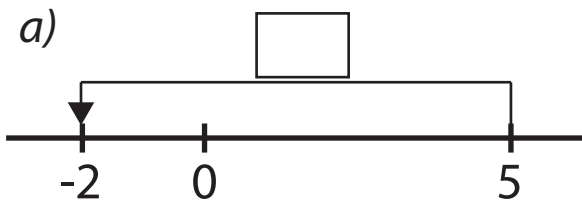


Name: _____

1) Show the value of the missing number on each number line.



2) Show the amount added or subtracted to make these correct.



3) Jack counted backwards ten places on a number line from six. On which number did Jack stop? _____

4) Jack counted forwards fifteen places on a number line from negative five. On which number did Jack stop? _____

5) The temperature in the morning was minus 3 degrees Celsius. By the afternoon, the temperature had risen by 18 degrees Celsius. What was the temperature in the afternoon? _____

6) The temperature at 3 p.m. was 12 degrees Celsius. By midnight, it was minus 14 degrees Celsius. By how much did the temperature drop from 3 p.m. to midnight? _____