


- 1 Charlie is making 10 drinks. After making 6 drinks, how many more does he still need to make?




A:

- 3 10 chicks hatched over the weekend. 5 hatched on Saturday. How many chicks hatched on Sunday?



A:

- 5 Joey needs to walk for 10 minutes. So far he has walked for 9 minutes. How many minutes left?



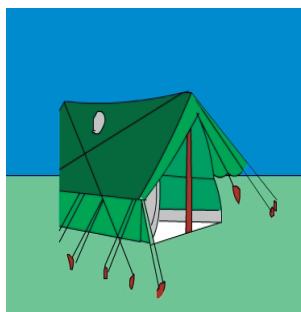
A:

- 7 It will take Alan 10 hours to paint the house. He has been painting for 2 hours, how many hours of painting does he have left?




A:

- 9 My family went camping for 10 days. After the 8th day, how many days of camping left?



A:

- 2 There are 10 seagulls. 6 can be seen and the rest are behind the wall. How many seagulls are behind the wall?



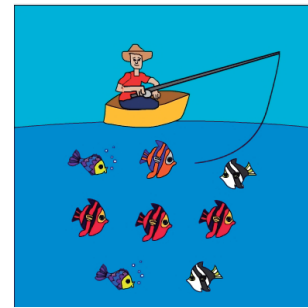
A:

- 4 Fred has 3 stars on his chart. How many more does he need to have 10?



A:

- 6 Tom has 8 fish. How many more fish does he need so he has 10.



A:

- 8 Jacob's team scored 10 goals in the game. If they scored 4 goals in the first half, how many goals did they score in the second half?



A:

- 10 Jan has 10 questions for homework. After finishing 8 questions, how many questions left?



A: