

Quart

The Quart: Comparing the capacity of containers to 1 quart.


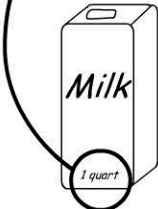








Parent guided activity: Please ask an adult to help you.



Look for items around your home that measure their content in milliliters or quarts.

Find two items which have a capacity less than a quart, equal to a quart, and more than a quart.

Draw each item and record its capacity.

| Less than 1 quart | Equal to 1 quart | More than 1 quart |
|--|--|---|
| <div></div> <p>capacity = 375 ml</p> | <div><p>The capacity should be on the container.</p></div> <p>1 quart (946ml)</p> | <div></div> <p>capacity = 2 quarts</p> |
| <p>capacity = _____</p> | <p>1 quart (946 ml)</p> | <p>capacity = _____</p> |
| <p>capacity = _____</p> | <p>1 quart (946 ml)</p> | <p>capacity = _____</p> |
| <div></div> | | |