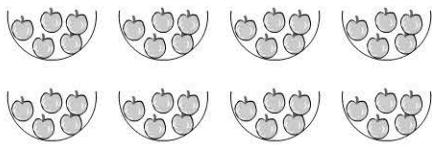



# Groups of 5



How many apples altogether? \_\_\_\_\_



1 group of 5 = \_\_\_\_\_

2 groups of 5 = \_\_\_\_\_

3 groups of 5 = \_\_\_\_\_

4 groups of 5 = \_\_\_\_\_

5 groups of 5 = \_\_\_\_\_

6 groups of 5 = \_\_\_\_\_


7 groups of 5 = \_\_\_\_\_

8 groups of 5 = \_\_\_\_\_


9 groups of 5 = \_\_\_\_\_

10 groups of 5 = \_\_\_\_\_

## Working Mathematically


1) 

There are 5 pegs in each bag. How many pegs altogether? \_\_\_\_\_

2)  How many bottles are there? \_\_\_\_\_

3) 10 groups of 5 equals \_\_\_\_\_

4)  $5 + 5 + 5 + 5 + 5 =$  \_\_\_\_\_

5) 

Each team has 5 girls. How many in 10 teams?

- 50 girls
- 40 girls
- 30 girls
- 20 girls