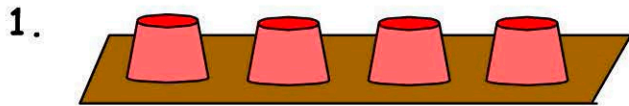


Chance, Position & Mixed Operations

Name:

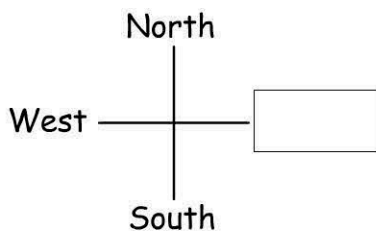
Date:








The chance of correctly picking the cup that's covering the ball?

- 1 in 3 4 in 4
 1 in 4 1 in 2

2. Fill in the missing compass point.



3.

	A	B	C	D	E	F	G	H	I
1									
2									
3									
4									

Which shape is at H4?

-  
  


4. Which shape is in column F?

-  
  

5. Which two shapes are in row 2?

-    
    


6.

	A	B	C
1			
2			

What would the coordinates of the square be?

- C2 D1
 C1 D2

7. What's the chance of picking a red marble from the bag?



- 1 in 8 1 in 3
 1 in 6 1 in 10

8. What's the chance of picking a blue marble from the bag?

- 1 in 6 6 in 6
 0 in 6 3 in 6
 (no chance)

9. $8 + 3 \times 4 =$

10. $30 - 2 \times 5 =$