

# Time

Name:

Date:

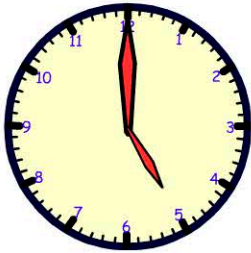
1. Which season occurs during December, January, February?.

- spring       fall  
 summer       winter

2. How many minutes in one hour?

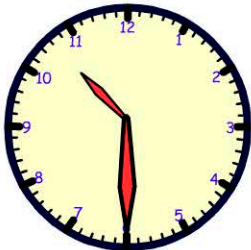
minutes in one hour

3. What time is shown on the clock?



- 5 o'clock       6 o'clock  
 12 o'clock       1 o'clock

4. Which digital clock's time is the same as the analog clock?



- 

5. How long till eleven o'clock? (from the time on the clock above).

- 10 min       30 min  
 20 min       40 min

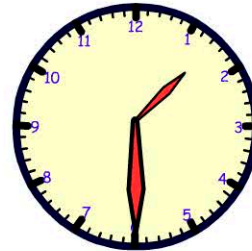
6. How many days in July?

- 30       28  
 31       29

7. What is the date exactly 3 weeks after June 4?

- June 7       June 18  
 June 11       June 25

8. Three and a half hours after the time on the analog clock.



- 2 o'clock       4 o'clock  
 5 o'clock       6 o'clock

9. How many hours in one day?

hours

10. Jacelyn left home at 8:00. She arrived at school at 8:30. How long did it take her to walk to school?

min