

name:


Tally marks are used when counting or keeping score.

| = 1    ||||| = 5    example: ||||| ||||| || = 12


Susan asked 34 students which fruit (out of the 4 shown) they prefer to eat. She displayed the results using drawings.

1. Record the results in the table using tally marks.


Apples



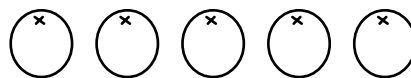
Bananas



Pears



Oranges

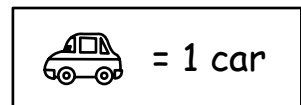



| Awards Earned |        |
|---------------|--------|
| Fruit         | Number |
| Apples        |        |
| Bananas       |        |
| Pears         |        |
| Oranges       |        |

The number of cars sold each day for one week are shown using symbols.

1. Record the data in the table using tally marks.

Monday




Tuesday



Wednesday



Thursday



Friday



| Cars Sold |        |
|-----------|--------|
| Day       | Number |
| Monday    |        |
| Tuesday   |        |
| Wednesday |        |
| Thursday  |        |
| Friday    |        |