

Addition

Add numbers up to 30 to numbers up to 100.

Name: _____

$64 + 29 = \underline{\quad}$

$38 + 26 = \underline{\quad}$

$4 + 21 = \underline{\quad}$

$36 + 24 = \underline{\quad}$

$30 + 25 = \underline{\quad}$

$1 + 20 = \underline{\quad}$

$69 + 25 = \underline{\quad}$

$51 + 21 = \underline{\quad}$

$65 + 27 = \underline{\quad}$

$65 + 26 = \underline{\quad}$

$44 + 25 = \underline{\quad}$


$42 + 23 = \underline{\quad}$

$24 + 21 = \underline{\quad}$

$54 + 20 = \underline{\quad}$

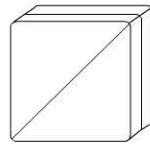
Working Mathematically

- 1) The park has 47 small fish and 24 large fish in the pond.



How many fish altogether? _____

- 2) The school canteen made sandwiches for lunch orders.



52 salad sandwiches

26 cheese sandwiches

How many sandwiches did they make altogether? _____

- 3) Number of cars sold in the car yard this year:




=57



=22

How many black and white cars have been sold this year? _____

- 4)



The mother bird caught 46 worms for the nest. The father bird caught 26. How many did they catch? _____