

name:

Data can be displayed using picture graphs

The table shows the number of cars in the school's car park each day for one week.
1. Use the information to display the data using a picture graph.

Cars Parked				
Mon	Tues	Wed	Thurs	Fri
7	4	6	3	5

Cars Parked in the School's Car Park





Monday	
Tuesday	
Wednesday	
Thursday	
Friday	



= 1 car

The number of awards each student earned is shown.

1. Use the information to display the data in a picture graph.

			
Sally : 6 awards	Ben : 4 awards	Carla : 2 awards	Herman : 7 awards

Awards Earned

Sally	
Ben	
Carla	
Herman	



= 1 award