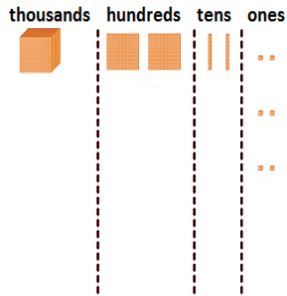


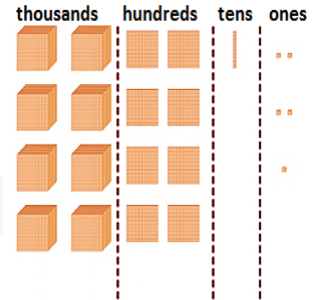
## Identifying place value to 10000

1 What number is represented by the blocks?



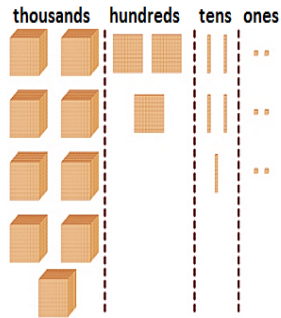
A:

2 What number is represented by the blocks?



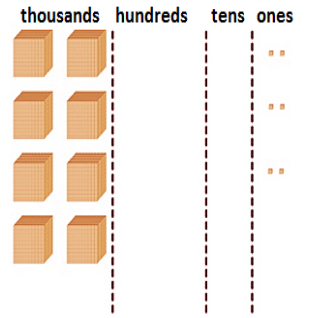
A:

3 What number is represented by the blocks?



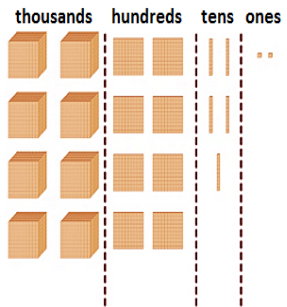
A:

4 What number is represented by the blocks?



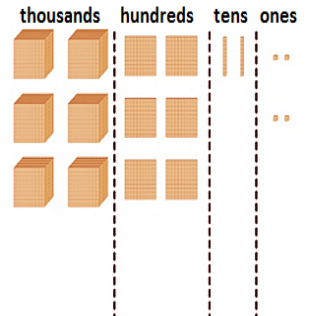
A:

5 What number is represented by the blocks?



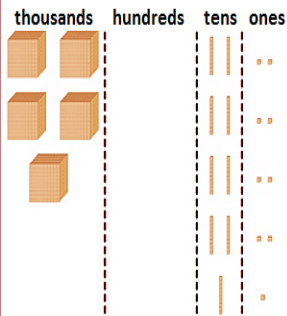
A:

6 What number is represented by the blocks?



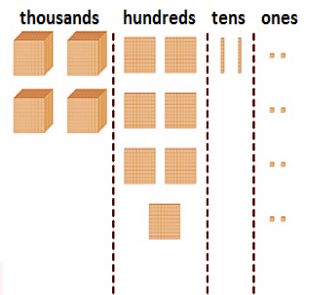
A:

7 What number is represented by the blocks?



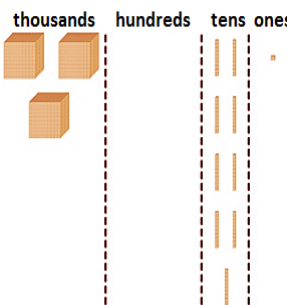
A:

8 What number is represented by the blocks?



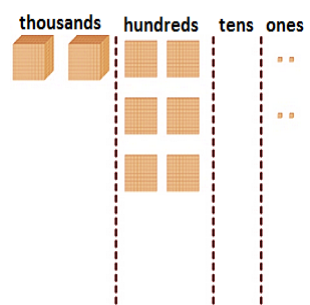
A:

9 What number is represented by the blocks?



A:

10 What number is represented by the blocks?



A: