

Mass

Converting pounds and kilograms to grams.

Name: _____

Let's go shopping!









How much do the vegetables weigh altogether?

- potatoes _____
- pumpkin _____
- beans _____
- onions _____
- mushrooms _____

How much more than the mushrooms does the chicken weigh ?

- chicken _____
- mushrooms _____
- difference _____

If I need to bake a chicken half an hour for every kilogram of mass, how long will it take to cook this chicken?

<p><i>pumpkin</i></p>  <p>1.5 lbs = _____ g</p>	<p><i>potatoes</i></p>  <p>2.5 lbs = _____ g</p>
<p><i>onions</i></p>  <p>2 lbs = _____ g</p>	<p><i>beans</i></p>  <p>1.5 lbs = _____ g</p>
<p><i>chicken</i></p>  <p>2.5 kg = _____ g</p>	<p><i>mushrooms</i></p>  <p>0.850 kg = _____ g</p>
<p><i>gravy</i></p>  <p>0.450 kg = _____ g</p>	<p><i>icecream</i></p>  <p>0.750 kg = _____ g</p>

There are 1000 grams in 1 kilogram.

There are 454 grams in 1 pound.