

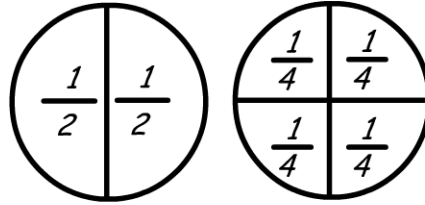
## Fractions & Decimals

Name: \_\_\_\_\_

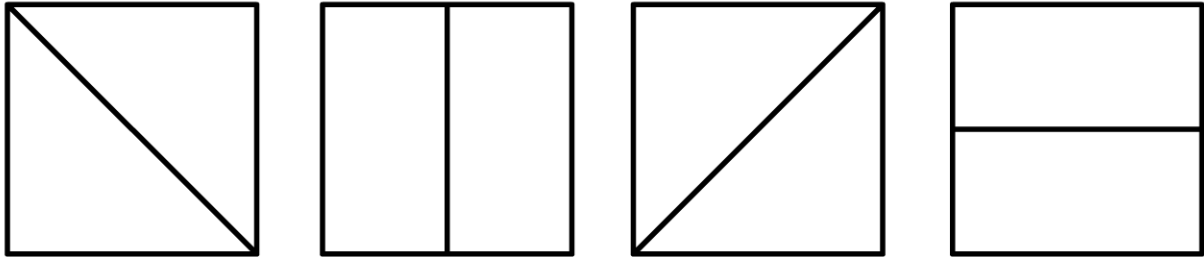
Finding equivalence between halves and quarters.

*A whole can be divided into equal parts -*

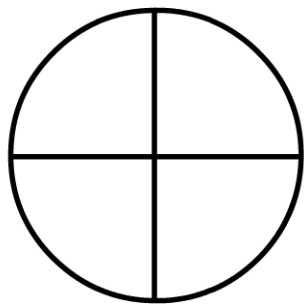
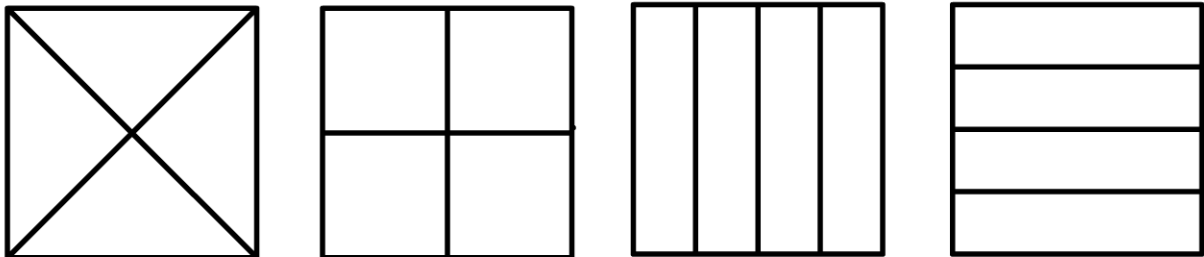
*2 halves and  
4 quarters.*



*Color half of each of these squares:*



*Color half of each of these squares:*



*1 whole is equal to \_\_\_\_\_ quarters.*

*1 whole is equal to \_\_\_\_\_ halves.*

*4 quarters is the same as \_\_\_\_\_ halves*

*\_\_\_\_\_ quarters is the same as 1 half.*