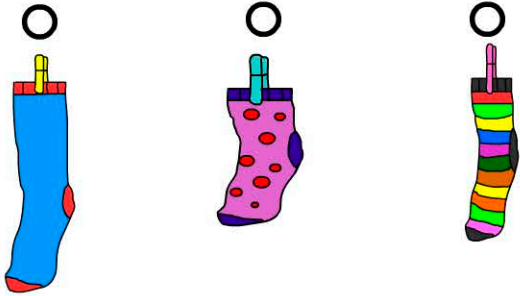


Length

Name:

1. Which sock is the shortest?




2.

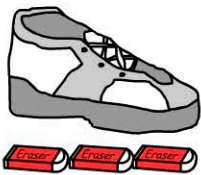


The pencil is the same length as blocks.

3. Who is the tallest?




4. How long is the shoe?

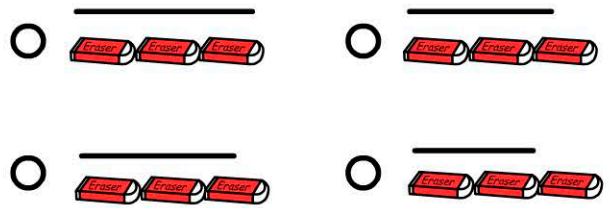


- 1 eraser 3 erasers
 2 erasers 4 erasers


5. Which line is the shortest?



6. Which line is the longest?



7. Which animal has the longest tail?



8. Sophie is as tall as _____



- 4 boxes
 5 boxes
 6 boxes

9.



Daniel is as tall as



boxes.

10. Daniel is box taller than Sophie.

score: