

Four Operations, Money and Mass


Name:

Date:

1. $5 + 5 + 5 + 5 =$


☐ 10 ☐ 25

☐ 20 ☐ 30




6 groups of 5 =

3. Which is equal to 40c?



4. The tin is equal in weight to?




- ☐ 1 block
☐ 2 blocks
☐ 3 blocks
☐ 4 blocks

5. $6 + 5 + 6 =$

14 15 16 17

☐ ☐ ☐ ☐

6. $12 \div 4 =$



☐ 1 ☐ 3

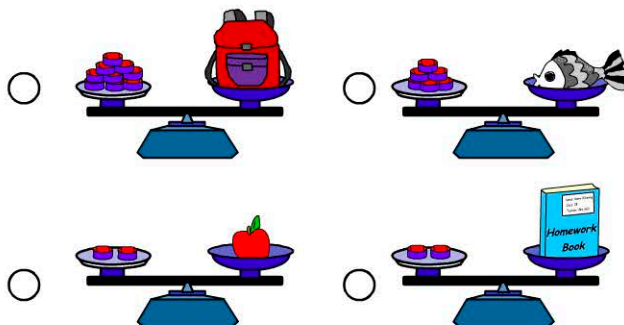
☐ 2 ☐ 4

7. How much money does Jen have?



- ☐ 10 cents
☐ 15 cents
☐ 20 cents
☐ 50 cents

8. Which item is the heaviest?



9. Which number comes next in the pattern?

10, 20, 30, 40,

10. $3 \times 5 =$