

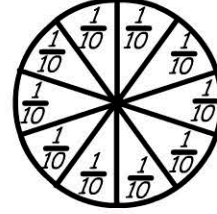
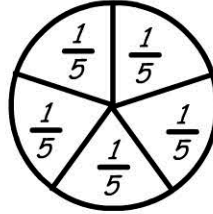
# Fractions & Decimals

Name: \_\_\_\_\_





Finding equivalence between fifths & tenths.

*A whole can be divided into equal parts -*

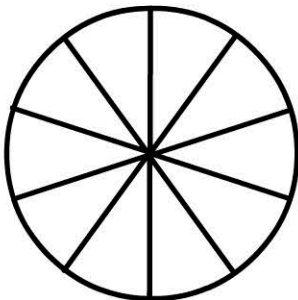
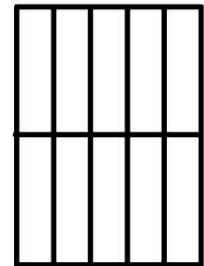
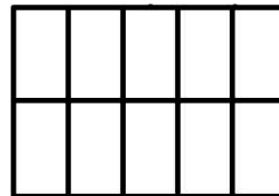
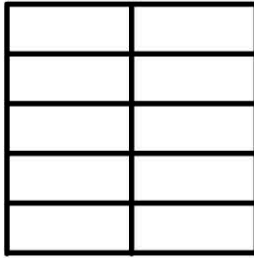
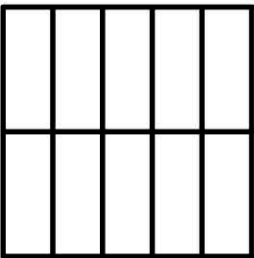
*5 fifths and  
10 tenths.*



*Colour one fifth of each of these shapes:*



*Colour half of each of these shapes:*



*1 whole is equal to \_\_\_\_\_ fifths.*

*1 whole is equal to \_\_\_\_\_ tenths.*

*\_\_\_\_\_ tenths is the same as 1 fifth.*

*\_\_\_\_\_ tenths is the same as 1 half.*