

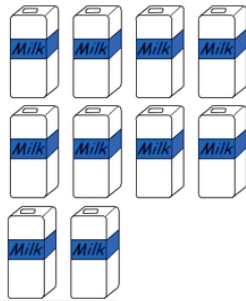
Share between two

- 1 A sandwich is cut into 4 quarters and shared equally between 2 children. How many quarters will each child receive?



A:

- 3 10 cartons of milk need stacking into 2 equal groups. How many cartons in each stack?




A:

- 5 Kate bought 16 items from the store. She placed an equal number of items in each bag. How many items in each bag?



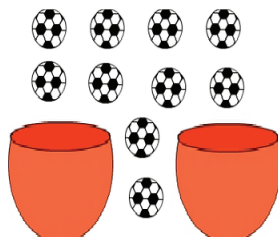
A:

- 7 Share the lollipops equally between the two children. How many each?




A:

- 9 Josie was asked to place an equal number of balls in each basket. How many balls should she place in each basket?



A:

- 2 Aisha collected some shells. She decided to share them equally with her sister. How many shells does Aisha keep for herself?




A:

- 4 Share 6 biscuits equally between 2 people. How many biscuits each?



A:

- 6 2 mice found 4 pieces of cheese which they shared equally. How many pieces of cheese did each mouse get?




A:

- 8 Harold shares \$16 equally with his brother Tom. How much does Harold give Tom?



A:

- 10 Share the strawberries equally between 2 children. How many strawberries will each child receive?



A: