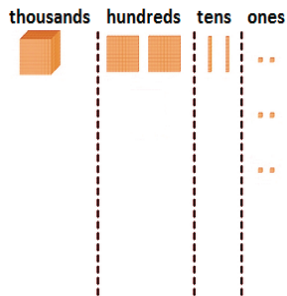


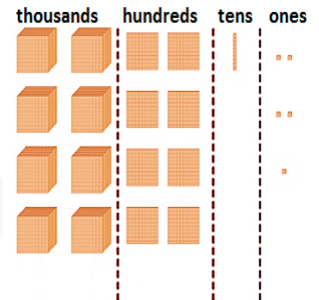
Identifying place value to 10000

1 What number is represented by the blocks?



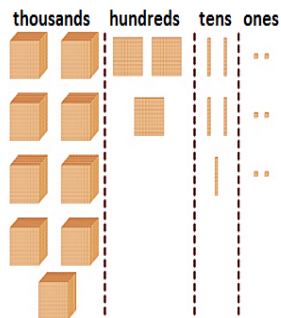
A: 1226

2 What number is represented by the blocks?



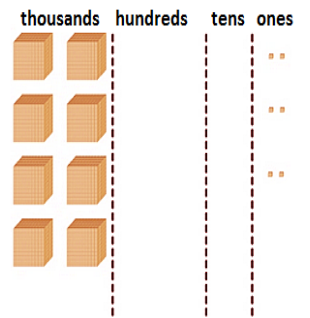
A: 8815

3 What number is represented by the blocks?



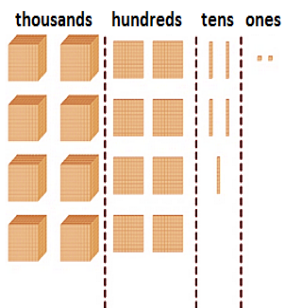
A: 9356

4 What number is represented by the blocks?



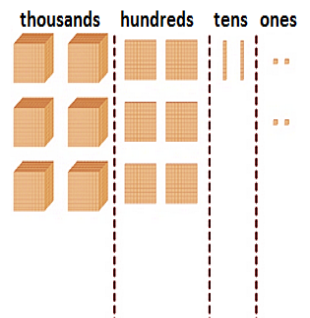
A: 8006

5 What number is represented by the blocks?



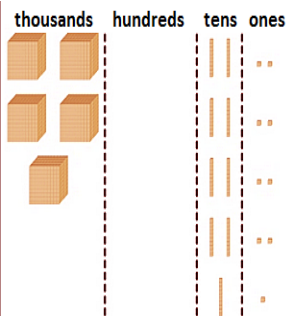
A: 8852

6 What number is represented by the blocks?



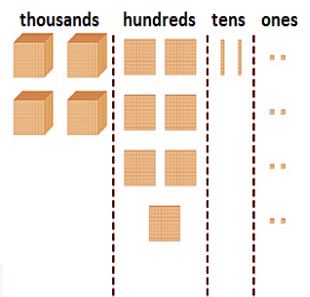
A: 6624

7 What number is represented by the blocks?



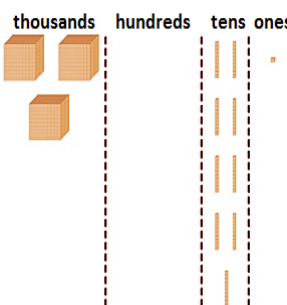
A: 5099

8 What number is represented by the blocks?



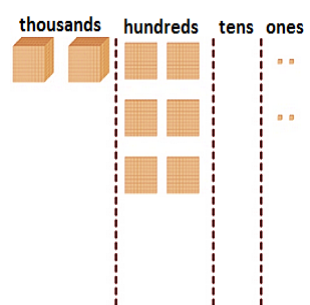
A: 4728

9 What number is represented by the blocks?



A: 3091

10 What number is represented by the blocks?



A: 2604