




Name:

Number of Rabbits We Saw

Monday	
Tuesday	
Wednesday	

1. On which day did they see the most rabbits?

Monday Tuesday Wednesday

2. How many rabbits did they see on Monday?









Monday	10
Tuesday	6

How many seagulls were counted on Tuesday?

6 2
 10 4

4. How many green cars went past the school?

red		
blue		
green		

3 5
 6 4

5. How many cars altogether?

5 10
 8 13

6. How many children have blue eyes?

	brown	5
	green	3
	blue	4

5 6
 3 4

7. Which has the most?



OUR PETS		
cats	dogs	mice
4	8	3

8. How many children have mice as pets?

8 3
 4 10

9. How many children have dogs as pets?

10. How many more children have dogs than mice?