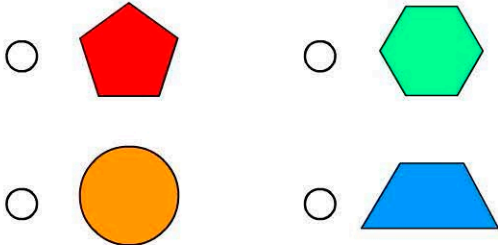


# 2D Space

Name:

Date:

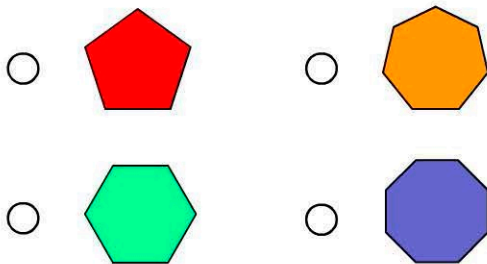
1. Which 2D shape is a trapezoid?



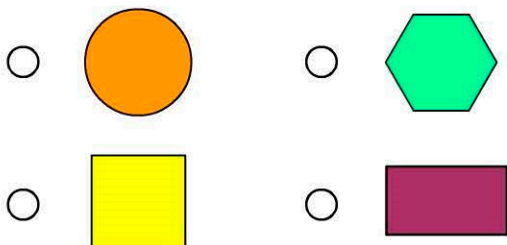
2. How many sides does a square have?

A square has  sides.

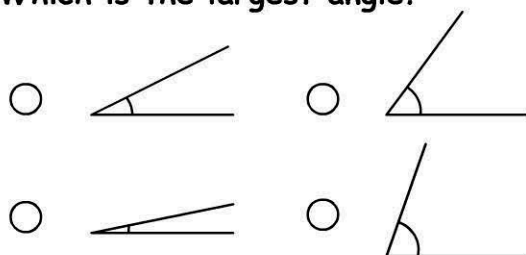
3. Which 2D shape is a hexagon?



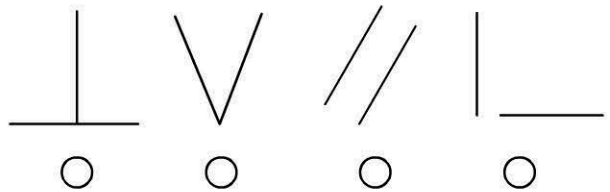
4. Which of these shapes will not tessellate?



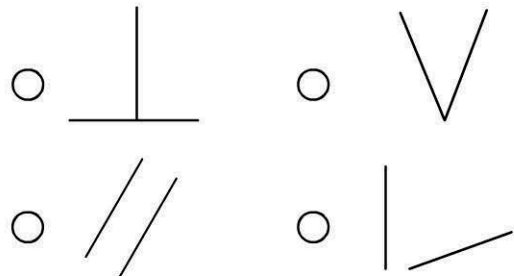
5. Which is the largest angle?



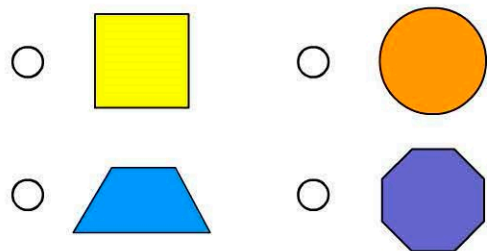
6. Which lines are parallel?



7. Which lines are perpendicular?



8. Which shape has the most lines of symmetry?



9. How many corners does a rhombus have?

A rhombus has  corners.

10. A pentagon has  angles?