



# Groups of 10

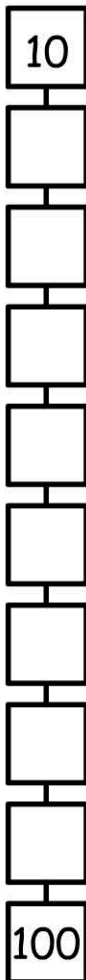


How many lollies are in the bag? \_\_\_\_\_



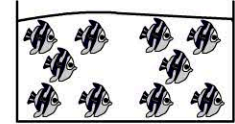
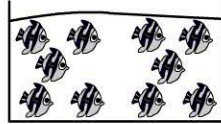
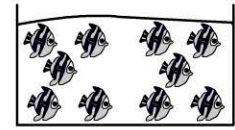
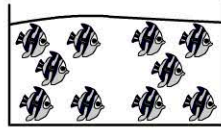
How many lollies in 3 bags? \_\_\_\_\_

Count by 10's



# Working Mathematically

1)



How many fish are there? \_\_\_\_\_

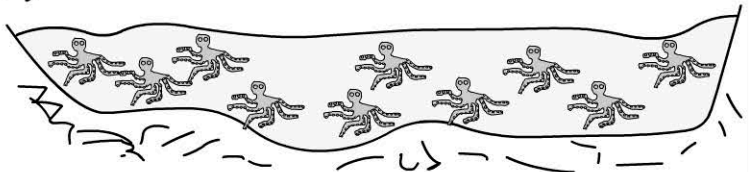
2) 7 groups of 10 = \_\_\_\_\_

3) 9 groups of 10 = \_\_\_\_\_

4) 3 groups of 10 = \_\_\_\_\_

5) 8 groups of 10 = \_\_\_\_\_

6)



Each pool has 10 octopuses. How many octopuses in 10 pools?

- 30 octopuses
- 80 octopuses
- 100 octopuses
- 10 octopuses