
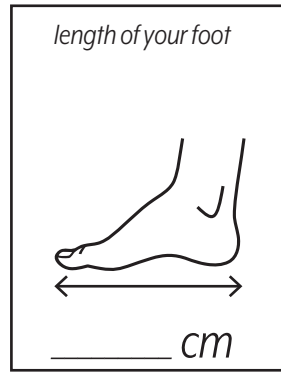
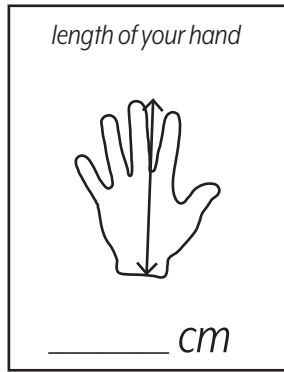
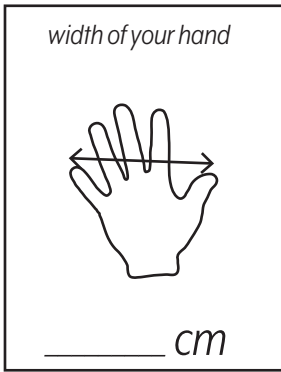




Name: \_\_\_\_\_

## Centimeters

Measure the length of each body part.

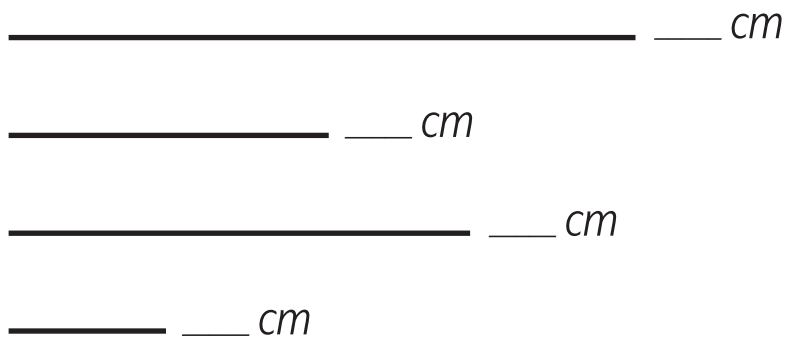


Measure the length of four items. Draw each item and record its length.



Draw a square that has sides each 4 cm in length.

Measure the length of each line.



What is your height in centimeters \_\_\_\_\_

Find something that has a length of about 10 centimeters. What did you find? \_\_\_\_\_

Find something that is about the same width as your hand. What did you find? \_\_\_\_\_

