

Name: _____ Date: _____

Quarter Notes




Quarter notes equal _____ beat. They can be written two ways:



The stem joins on the _____



The stem joins on the _____



Below middle line:
Use up stems





On middle line:
Use either



Above middle line:
Use down stems



Draw ten or more quarter notes on the correct lines of the staff.



Draw quarter notes on the correct spaces on the staff. (Think carefully about stems up or down.)

F C E A C F E A F A C E

Draw quarter notes on the correct lines on the staff. (Think carefully about stems up or down.)

G B E D F E G B D F D G