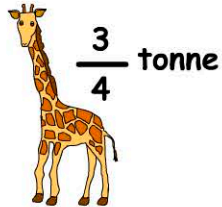


Mass

Name:

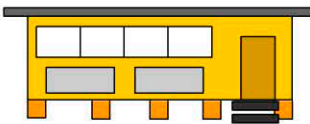
Date:

1. How heavy is the giraffe?



- 250kg 750kg
 500kg 1000kg

2. What's the weight of the building in kilograms?



weight: 7t & 456kg

weight = kg

3. What's the average weight for a horse?

- 10000g $\frac{1}{4}$ tonne
 625kg 3.5 t


4. What's the jockey's weight?

horse + jockey
 = 737kg
 horse =
 679kg



- 56kg
 62kg
 60kg
 58kg

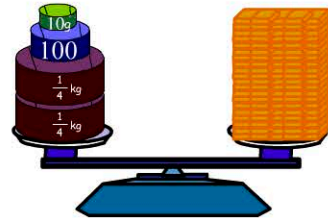
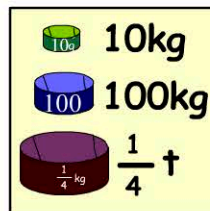
5. Which animal is being weighed?



4700kg

- A whale
 A giraffe
 An elephant
 An emu

6. How much do the bricks weigh?



- 360kg 610kg
 660kg 600kg

7. What's George's weight in kilograms and grams?



GEORGE

47890g

- 47kg 890g
 47kg 90g
 47kg
 47kg 89g

8. 2000 X 12g marbles. What's the total weight?

- 2400g 240kg
 24kg 24t

9. An airplane weighs 368t. How many kilograms is this?

kg

10. 5.5t = kg