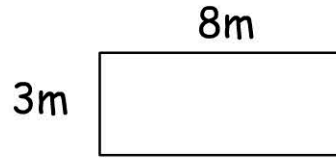


# Perimeter

Name:

Date:

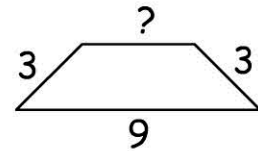
perimeter =



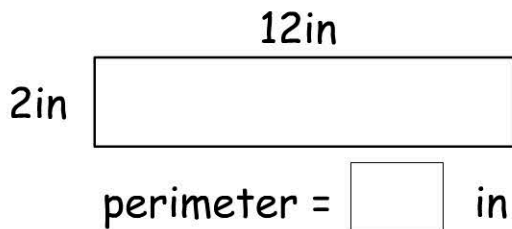
- 11m       24m  
 22m       38m

Calculate the length of the missing side.

perimeter = 22



- 37     9     7     6



Henry walked around his paddock twice. How far did he walk?

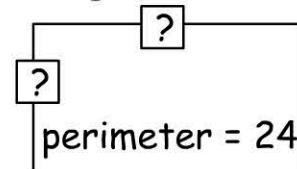
**One lap = 350ft**

- 700ft     450ft  
 600ft     350ft

What is the perimeter of a square that has 8cm sides.

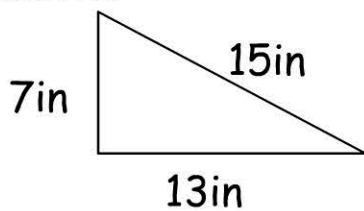
- 32cm     56cm  
 34cm     64cm

What are the missing sides. Choose two answers.



- 4     6     8     10

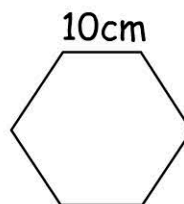
Perimeter =



- 32in     34in  
 33in     35in

Shape: square    Each Side: 15in

perimeter =  in



perimeter =  cm

The perimeter of a pentagon with 6 inch sides is:

- 20in     30in  
 25in     35in