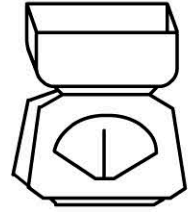


Name: \_\_\_\_\_

## Mass


### OUNCES and GRAMS



Measure the mass of objects using a set of scales.

Draw a picture of each item and record its weight in ounces and grams.

**\*\*YOU CAN ROUND THE WEIGHTS TO NEAREST WHOLE NUMBERS**

				
28.5oz	_____ oz	_____ oz	_____ oz	_____ oz
800g	_____ g	_____ g	_____ g	_____ g

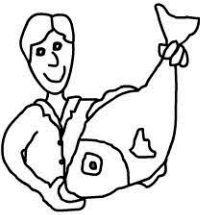
I used a \_\_\_\_\_ to measure these objects.

### POUNDS and KILOGRAMS



Measure the mass of objects using a set of scales.

Draw a picture of each item and record its weight in pounds and kilograms.

				
33lbs	_____ lbs	_____ lbs	_____ lbs	_____ lbs
15kg	_____ kg	_____ kg	_____ kg	_____ kg

I used a \_\_\_\_\_ to measure these objects.