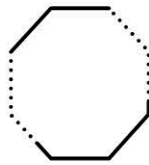
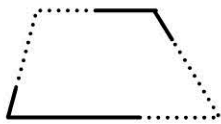
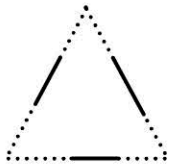


Name: _____

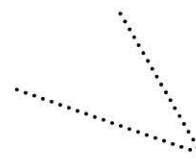


Locating angles on 2 dimensional shapes _____

Trace the angles to complete each shape.



Trace each angle.



Complete each angle by joining the dots - Circle the right angle.



Draw four angles - (Make one a right angle).

