

Name: _____

© Studyladder

Place Value - hundreds, tens and ones



hundreds



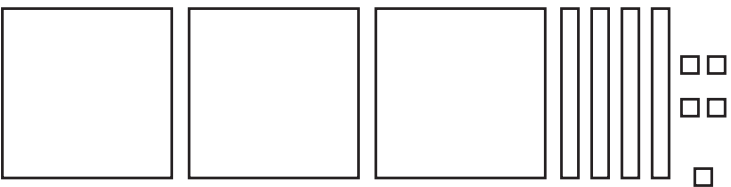
tens



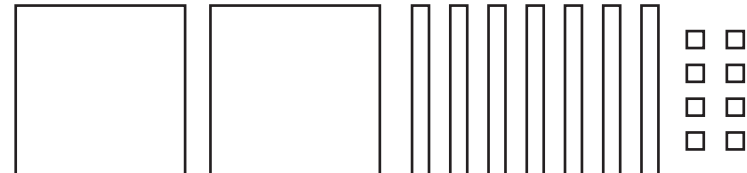
ones

For each number, write how many hundreds, tens and ones it has.

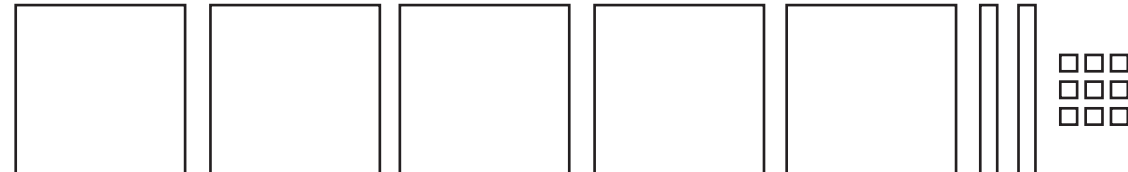
a)  _____ hundreds, _____ tens and _____ ones

b)  _____ hundreds, _____ tens and _____ ones

Look at the hundreds, tens and ones. What number do they make?

a)  _____

b)  _____

c)  _____

a) What number is made using 6 hundreds, 4 tens and 8 ones? _____

b) What number is made using 9 hundreds, 2 tens and 6 ones? _____

c) What number is made using 5 hundreds, 9 tens and 9 ones? _____