

Multiplication, Time and Area

Name:

Date:

1. 24×24 gives the same answer as:

- 32×16 25×23
 22×26 48×12

2. $57 \times 38 =$

3. How long till lunch if lunch is at 12pm?



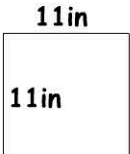



- 38 min. 15 min.
 22 min. 3 min.

4. How many minutes till 10:30?

- 12 28
 48 18

5. Which shape has the greatest area?

-  
  

**not to scale

	Mon.	Tues.	Wed.	Thurs.
9.00	spelling	spelling	reading	spelling
9.30	math	library		math
10.00	science	math	craft	spelling
10.30				

6. According to the timetable, what is the class doing on Monday at 10:15?

- science math
 spelling craft

7. On Wednesday reading finished 10 minutes early. At what time did it finish?

- 10:10am 10:20am
 9:50am 9.20am

8. What is the area of a field that is 25ft x 60ft?

- 170ft^2 1500ft^2
 85ft^2 150ft^2

9. How many minutes in 24 hours?

10. Melissa started her race at 9:32. She finished at 10:08. How long did she take? min.