

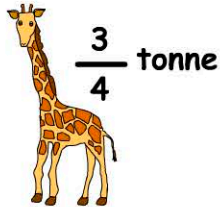
# Mass

\*\*use a metric tonne = 1000kg and 1kg = 2.2lbs

Name:

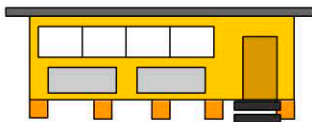
Date:

1. How heavy is the giraffe?



- 626lbs       1650lbs  
 1225lbs       1000lbs

2. What's the weight of the building in kilograms?



weight: 7t & 456kg

weight =  kg

3. What's the average weight for a horse?

- 22000lbs        $\frac{1}{4}$  tonne  
 1375lbs       3.5 t

4. What's the jockey's weight?


horse + jockey = 737kg



horse = 679kg

- 56kg  
 62kg  
 60kg  
 58kg

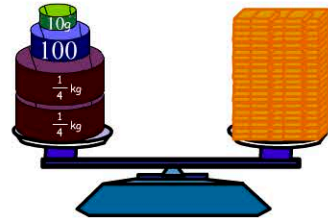
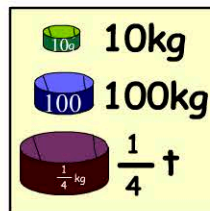
5. Which animal is being weighed?



10000lbs

- A whale  
 A giraffe  
 An elephant  
 An emu

6. How much do the bricks weigh?



- 360kg       610kg  
 660kg       600kg

7. What's George's weight in kilograms and grams?



GEORGE

47890g

- 47kg 890g  
 47kg 90g  
 47kg  
 47kg 89g

8. 2000 X 1/2oz marbles. What's the total weight?

- 47lbs       93lbs  
 62lbs       107lbs

9. An airplane weighs 368t. How many kilograms is this?

kg

10. 5.5t =  kg