


- 1 Share 21 balloons between 7 children. How many balloons each?



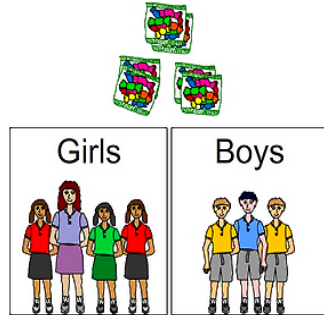
A:

- 2 First, 28 sweets are shared between 7 children. Hanna then gives her share to her sister Mary. How many sweets does Mary now have?




A:

- 3 35 sweets are shared between 7 children (see picture). How many sweets did the boys get altogether?




A:

- 4 The 21 minute boxing event is divided into 7 equal rounds. How many minutes each round?



A:

- 5 63 people in a tour group visited Uluru, Australia. They were divided into 7 equal groups for their guided tour. How many people in each group?




A:

- 6 Both sides of the equation need to be equal. What is the missing number?

$$24 \div 3 = 56 \div \underline{\quad}$$

A:

- 7 Share \$49 between 7 people. How much do they each get?



A:

- 8 Magda has 21 coins. She places them in 7 equal piles. How many coins in each pile?




A:

- 9 A skier needs to train for 21 hours over 7 days. If he wants to train the same number of hours each day, how many hours a day must he train?



A:

- 10 Each box contains 20 dictionaries. The combined weight of all the boxes is 49 kg. What's the weight of each box?



A: