

Name: _____ Date: _____

Half Notes



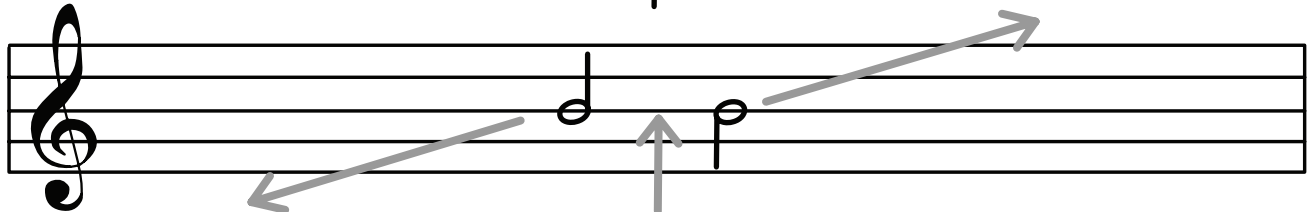
Half notes equal _____ beat. They can be written two ways:



The stem joins on the _____



The stem joins on the _____



Below middle line:
Use up stems



On middle line:
Use either



Above middle line:
Use down stems



Draw ten half notes with stems up.




Draw ten half notes with stems down.



Writing Notes on the Treble Staff

Notes in spaces:

F A C E




Notes on lines:

Every Good Boy Deserves Fruit




Draw half notes on the correct spaces on the staff. (Think carefully about stems up or down.)



F C E A C F E A F A C E

Draw half notes on the correct lines on the staff. (Think carefully about stems up or down.)



G B E D F E G B D F D G