

Name: \_\_\_\_\_

### Addition

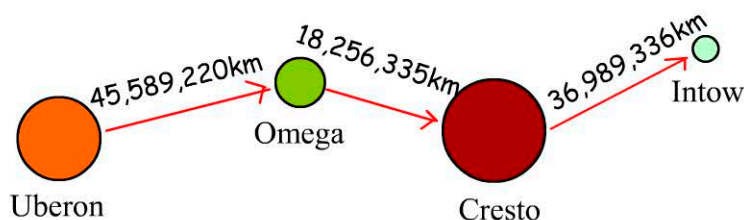
$$\begin{array}{r} 4568432 \\ + 947432 \\ \hline \\ \hline \end{array}$$

$$\begin{array}{r} 6598790 \\ + 6487607 \\ \hline \\ \hline \end{array}$$

$$\begin{array}{r} 7646788 \\ 8849976 \\ + 8947466 \\ \hline \\ \hline \end{array}$$

$$\begin{array}{r} 8643556 \\ 9998855 \\ + 9978379 \\ \hline \\ \hline \end{array}$$

### Working Mathematically

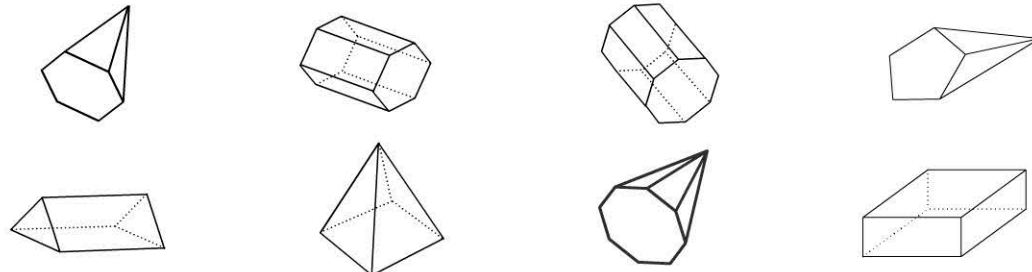


Creton 6 flew from Uberon to Omega, then to Cresto, and finally to Intow. How far did Creton 6 travel?

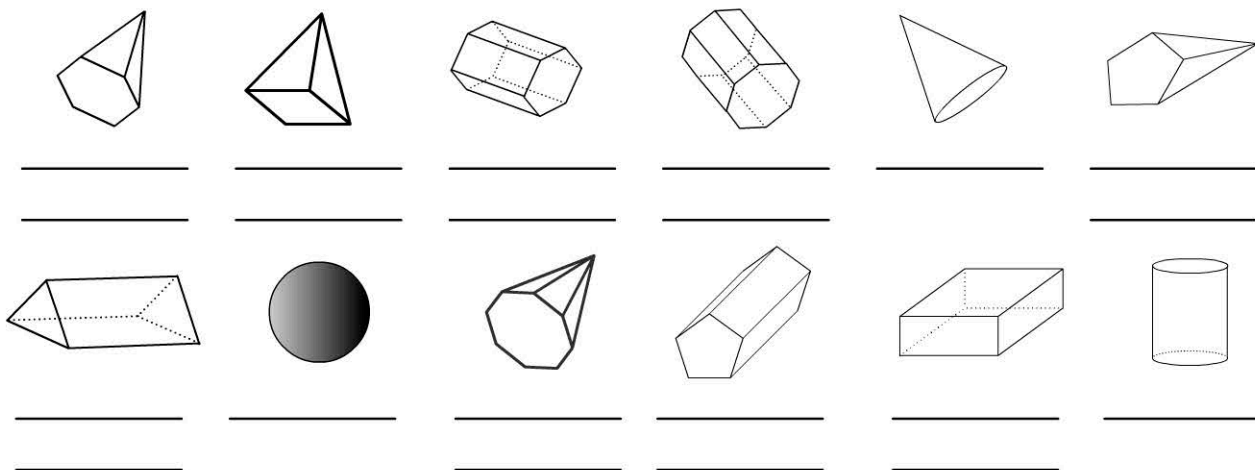
\_\_\_\_\_ km

### Prisms and Pyramids

Circle the prisms and draw rectangles around the pyramids.



### Three Dimensional objects Name these objects



cylinder, sphere, octagonal prism, square pyramid, cone, pentagonal pyramid, hexagonal prism, hexagonal pyramid, octagonal pyramid, pentagonal prism, triangular prism, rectangular prism.