

Mass, Money, Addition

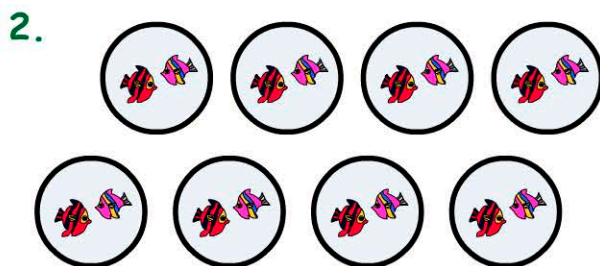
Name:

Date:

1. $2 + 2 + 2 + 2 + 2 =$


☐ 6 ☐ 10

☐ 8 ☐ 12




8 groups of 2 =

3. Which is a dime?



4. Which is the heaviest?



5. $4 + 5 + 3 =$

10 11 12 13

☐ ☐ ☐ ☐

6. Share 24 pencils between 3 people.



☐ 6 each ☐ 10 each

☐ 8 each ☐ 12 each

7. How much money does Jen have?



8. How many weights were used to balance the pears?



☐ 6 weights ☐ 9 weights

☐ 3 weights ☐ 1 weight

9. $10 \times 2 =$

10. $8 \times 2 =$